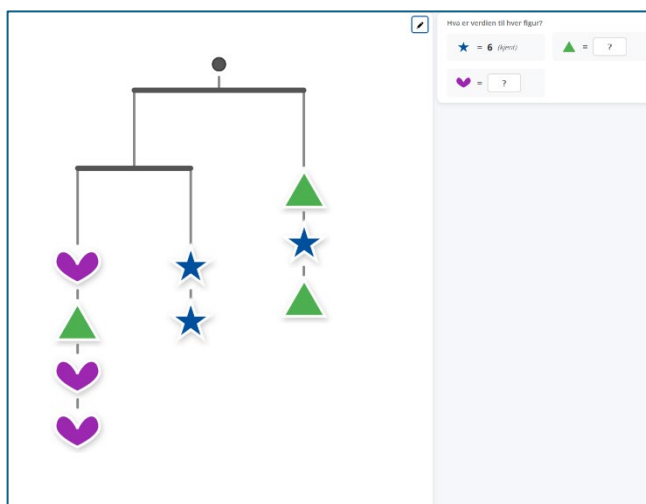
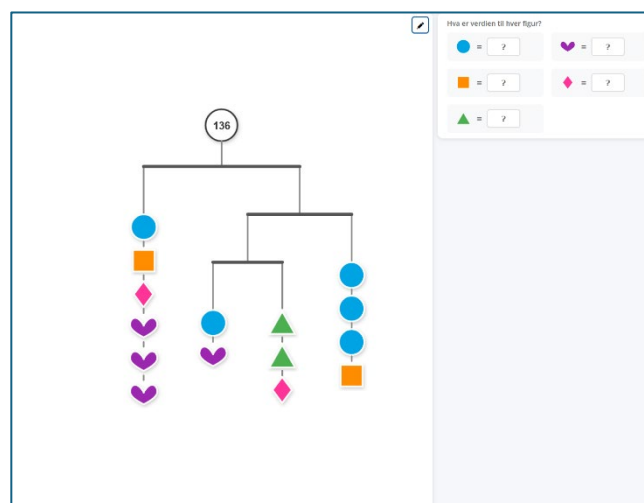


## Oppsummering

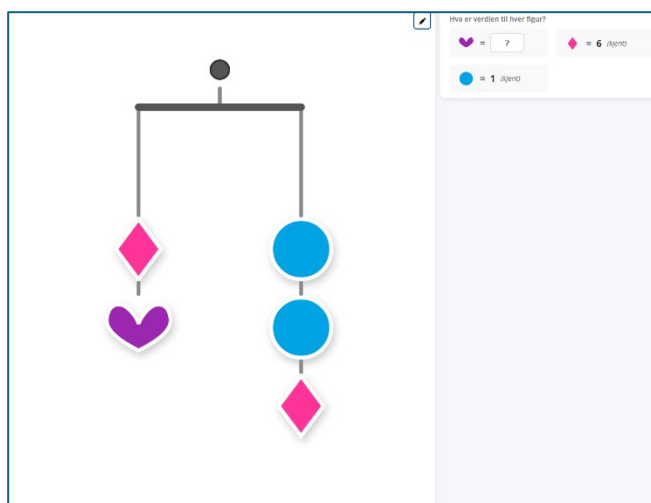
Ranger oppgavene etter hvor utfordrende de er.



A balance scale is shown with a fulcrum at the top. The left pan contains three purple hearts, a green triangle, two more purple hearts, and a green triangle. The right pan contains one green triangle, one blue star, and one green triangle. A control panel on the right asks "Hva er verdien til hver figur?" (What is the value of each figure?) and shows:  $\star = 6$  (Riktig) and  $\triangle = ?$ . There is also a field for  $\heartsuit = ?$ .



A balance scale is shown with a fulcrum at the top. The left pan contains one blue circle, one orange square, one pink diamond, and three purple hearts. The right pan contains one blue circle, one purple heart, one green triangle, one pink diamond, one blue circle, one blue circle, and one orange square. A control panel on the right asks "Hva er verdien til hver figur?" and shows:  $\bullet = ?$ ,  $\heartsuit = ?$ ,  $\square = ?$ ,  $\blacklozenge = ?$ , and  $\triangle = ?$ . The number 136 is written in a circle above the fulcrum.



A balance scale is shown with a fulcrum at the top. The left pan contains one pink diamond and one purple heart. The right pan contains two blue circles and one pink diamond. A control panel on the right asks "Hva er verdien til hver figur?" and shows:  $\heartsuit = ?$ ,  $\blacklozenge = 6$  (Riktig), and  $\bullet = 1$  (Riktig).